

# Recognising coins



**I** Match the coin to the amount.



20 pence



5 pence



10 pence



1 pound



1 pence



50 pence



2 pence





2 pounds

**2**

Here are some coins.




Complete the sentences.

There are  1p coins.There are  2p coins.There is  5p coin.There are  10p coins.There are  20p coins.**3**Write  $<$  or  $>$  to compare the amounts.**a)****b)**



4 Mo has one coin in his hand.

I have more than 2 pence,  
but less than 1 pound.



Draw Mo's coin.

What is the value of Mo's coin?

Is there more than one answer?

