

Using a ruler, match the times:

6:15 am

6:15 pm

4:15 pm

2:15 pm

2:15 am

02:15

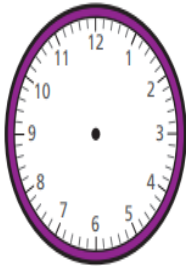

16:15

18:15

14:15

06:15

b)

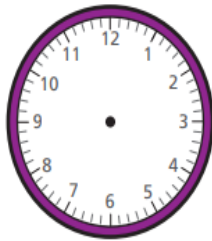
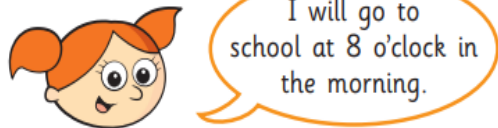


Show this time on each clock.  
Use 24-hour time on the digital clock.



Alex is planning her day.

a)



Show this time on each clock.  
Use 24-hour time on the digital clock.



Write the times in 24 hour clock times:

- a) 3:27 am \_\_\_\_\_
- b) 3:27 pm \_\_\_\_\_
- 2:27 am \_\_\_\_\_
- 4:27 pm \_\_\_\_\_
- 1:27 am \_\_\_\_\_
- 5:27 pm \_\_\_\_\_
- 12:27 am \_\_\_\_\_
- 6:27 pm \_\_\_\_\_

Write the 24-hour clock times using am and pm.

- a) 04:14 \_\_\_\_\_
- e) 13:27 \_\_\_\_\_
- b) 09:41 \_\_\_\_\_
- f) 19:17 \_\_\_\_\_
- c) 12:56 \_\_\_\_\_
- g) 20:48 \_\_\_\_\_
- d) 00:56 \_\_\_\_\_
- h) 23:09 \_\_\_\_\_