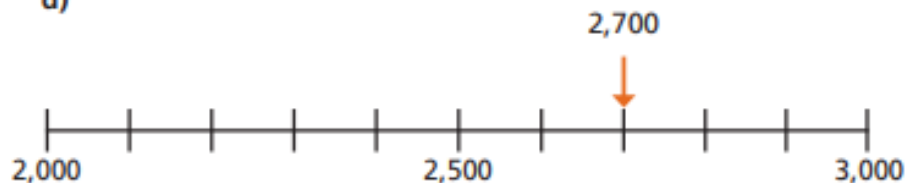


Rounding to the nearest 1000- fluency

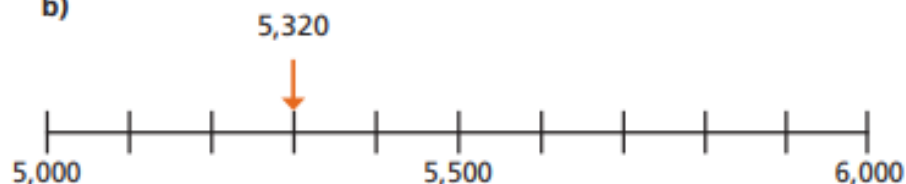
Use the number lines to help you round.

a)



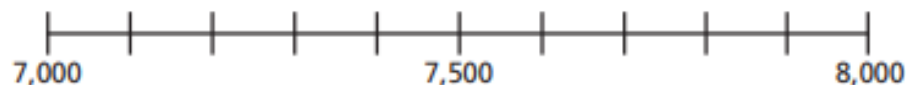
2,700 rounded to the nearest 1,000 is

b)



5,320 rounded to the nearest 1,000 is

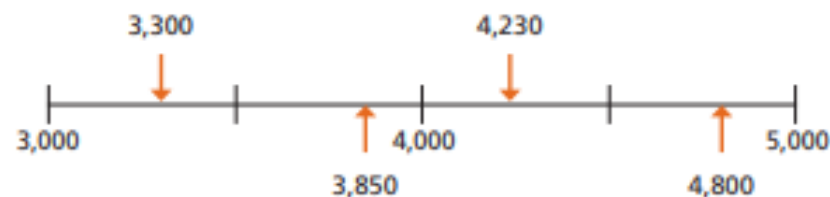
c)



7,450 rounded to the nearest 1,000 is

2

Circle the numbers that round to 4,000 to the nearest 1,000



3

Explain why 7,800 rounds to 8,000 to the nearest 1,000

4

Dora makes a number using place value counters.

Th	H	T	O
1,000	100 100 100 100 100	10 10 10 10 10 10 10 10	1 1 1

a) Round Dora's number to the nearest thousand.

b) Round Dora's number to the nearest hundred.

c) Round Dora's number to the nearest ten.