


21.1.21 Multiplication and Division -Divide by 8.

This is not a worksheet to print out. This is an on screen prompt to provide you with questions to aid your child's learning. The answers to these questions can be recorded using pencil and paper.

1. Use the images below to help you write out and complete these sentences.

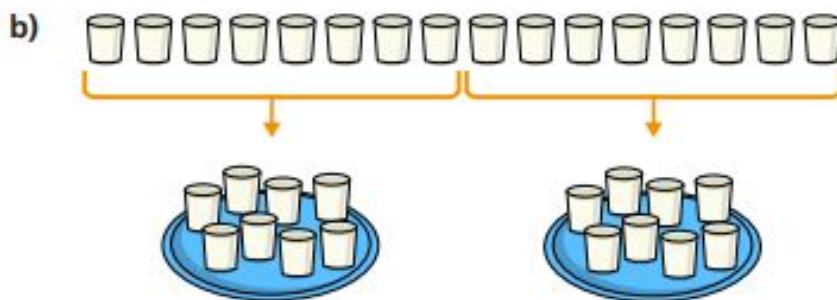


There are flowers.

There are vases.

Each vase has flowers.

16 shared into equal groups is



There are 16 glasses of milk.


There are glasses of milk on each tray.

There are trays.


16 shared into equal groups is

2. Draw out these bar models and fill in the missing values. Write a division statement for each value.


a)



b)



c)



3. Which of these numbers can be divided by 8? How do you know?

23

28

32

64

65