

Comparing Durations

Annie and Amir both went to the park on Saturday.

a)



I got to the park at 12:30 and left at 13:07

How long did Annie spend at the park?

minutes

b)

I got to the park at 14:50 and left at 15:33



How long did Amir spend at the park?

minutes

c) Who spent longer at the park? _____

How much longer did they spend there?

minutes

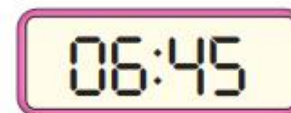
Write <, > or = to compare the durations.

a) 09:00 – 10:15 09:10 – 10:15

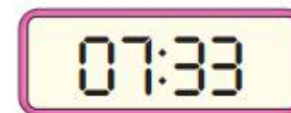
b) 19:00 – 20:15 18:50 – 20:10

Mrs Rose and Mr White both look at the time when they leave for work and when they arrive at work.

Mrs Rose



leave




arrive

Mr White leaves at 06:59 and arrives at the same time as Mrs Rose.

Who has the shortest journey time? _____

How do you know?

Two films are showing at the cinema.



Which film is longer? _____