

12.1.21


Multiplication and Division - Multiplying by 3

This is not a worksheet to print out. This is an on screen prompt to provide you with questions to aid your child's learning. The answers to these questions can be recorded using pencil and paper.

1. Write the sentences on your sheet of paper. Can you also write a multiplication statement (e.g. 4×4) and an addition statement (e.g. $4 + 4 + 4 + 4$) for each picture.



There are equal groups of





There are equal groups of



There are equal groups of

2. Write a multiplication question that matches the images below.



3. Do you agree with Dora? Explain your answer.



6 lots of 3
is 6 more than
5 lots of 3

Do you agree with Dora?

Explain why.